


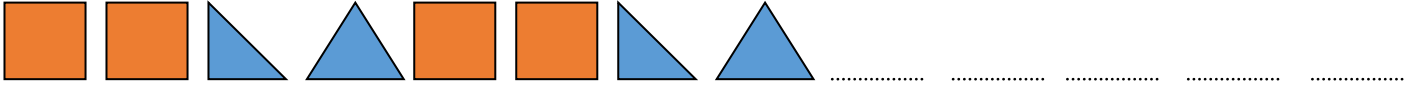




2.Sınıf

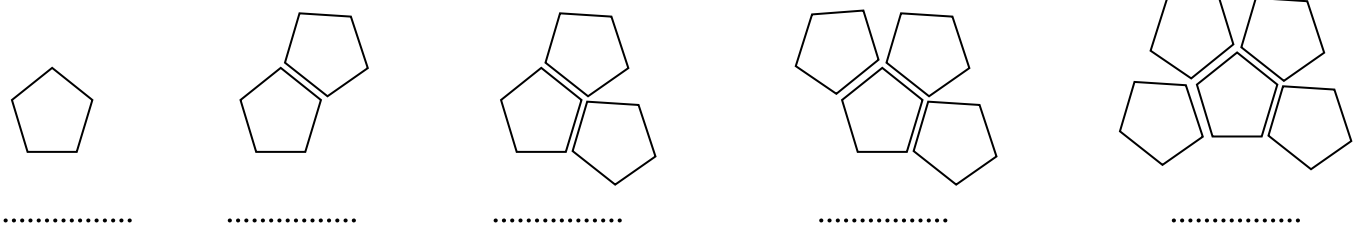
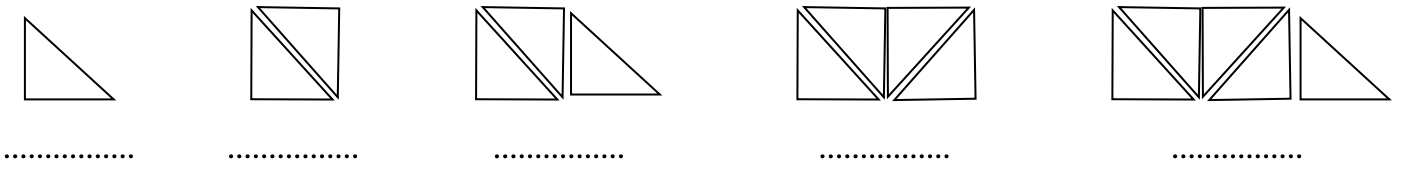
1 Etkinlik

Aşağıda verilen şekil örüntülerini devam ettirelim.



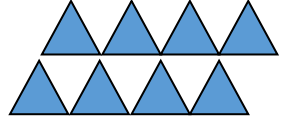
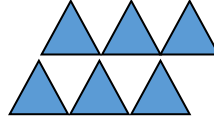
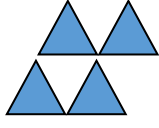
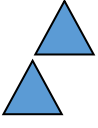
2 Etkinlik

Kenar sayılarından yola çıkarak şekil örüntülerini sayı örüntüsü yapalım.





Şekil örüntüsünü sayı örüntüsüne dönüştür ve kuralı yaz.



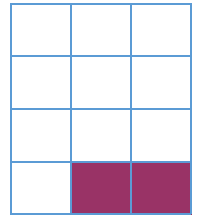
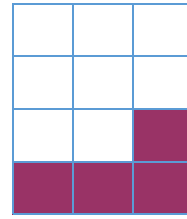




.....

.....

.....

.....

KURAL: Örüntü .....kenardan başlar .....şar artar.



.....

.....

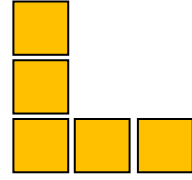


.....

.....

.....

.....

KURAL: Örüntü .....kareden başlar .....şer .....



.....


.....

.....

.....

.....

KURAL: Örüntü .....kenardan başlar .....er .....er .....



.....

.....

.....

.....

KURAL: Örüntü .....yıldızdan başlar .....er .....

