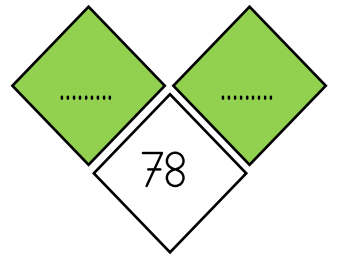
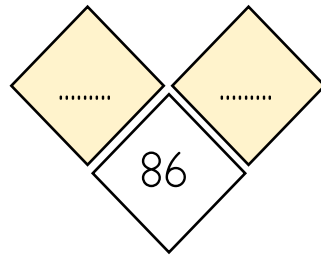
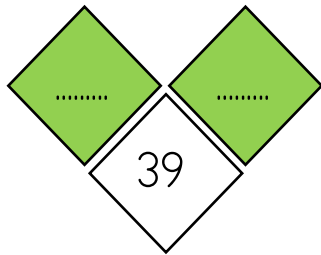
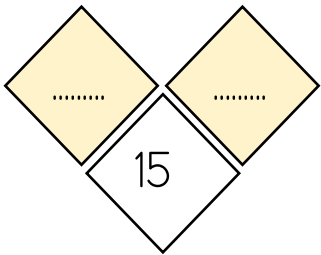
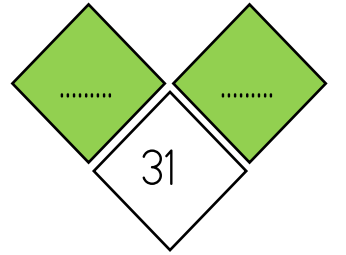
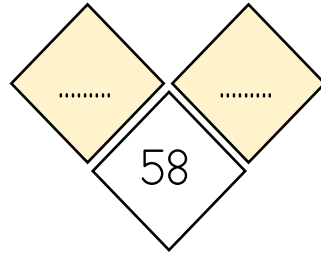
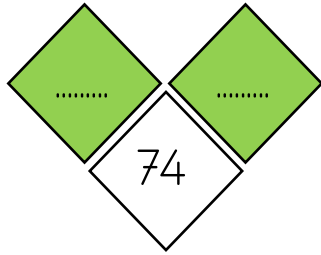
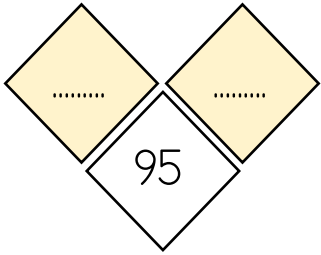
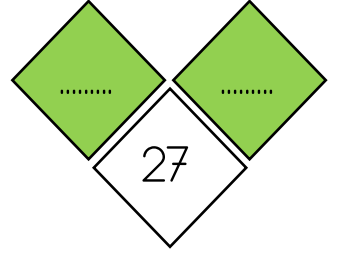
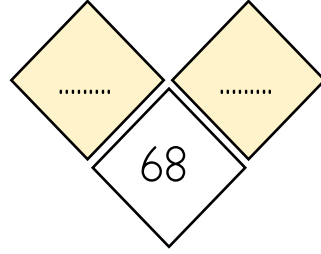
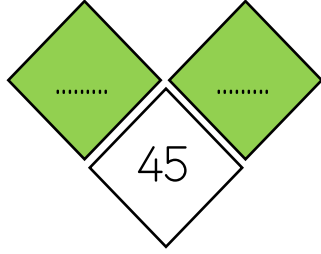
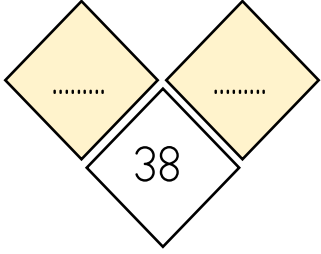




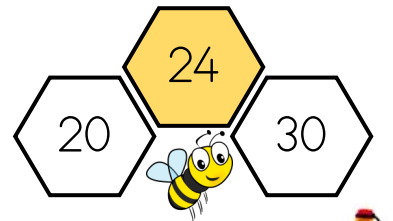
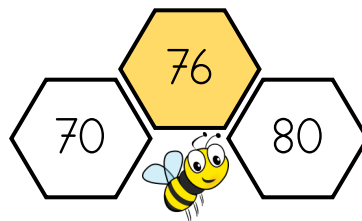
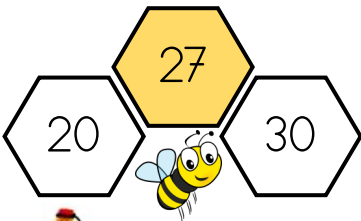
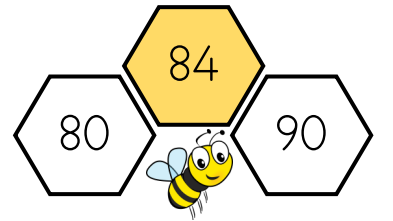
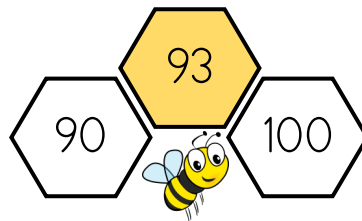
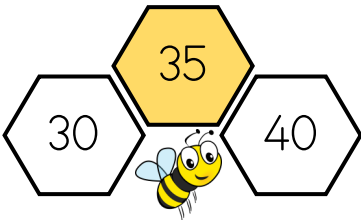
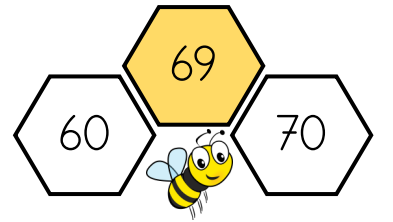
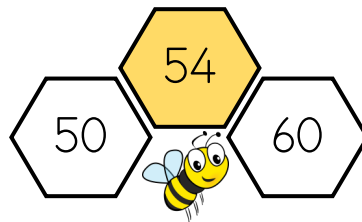
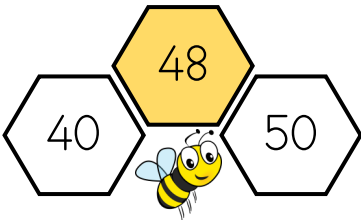
1 Etkinlik

Verilen sayılar hangi iki onluk arasında bulalım.



2 Etkinlik

Verilen sayılar hangi onluğu daha yakın boyayarak bulalım.





2.Sınıf

3 Etkinlik

Verilen boşlukları "daha yakın, daha uzak, eşit mesafededir." ifadeleri kullanarak dolduralım.

1) 23 sayısı 20'ye

9) 31 sayısı 40'a

2) 78 sayısı 80'e

10) 66 sayısı 70'e

3) 45 sayısı 40 ve 50'ye

11) 54 sayısı 50'ye

4) 12 sayısı 10'a

12) 95 sayısı 90 ve 100'e

5) 89 sayısı 90'a

13) 27 sayısı 30'a

6) 32 sayısı 40'a

14) 17 sayısı 10'a

7) 48 sayısı 40'a

15) 82 sayısı 90'a

8) 55 sayısı 50 ve 60'a

16) 35 sayısı 30 ve 40'a

4 Etkinlik

Verilen aralıktaki sayıları uygun sayılarla dolduralım.

30'a (30-40 arası sayılar)		
Daha yakın	Eşit	Daha uzak
.....
.....

60'a (60-70 arası sayılar)		
Daha yakın	Eşit	Daha uzak
.....
.....

80'e (80-90 arası sayılar)		
Daha yakın	Eşit	Daha uzak
.....
.....

50'ye (50-60 arası sayılar)		
Daha yakın	Eşit	Daha uzak
.....
.....

