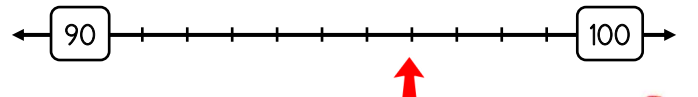
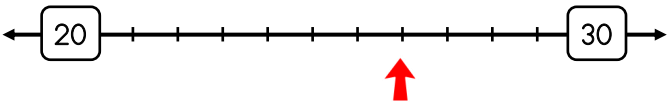
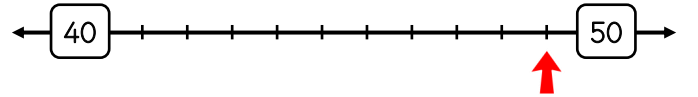
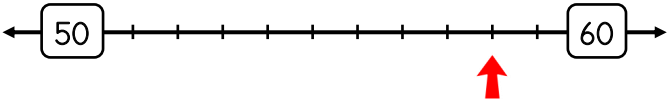
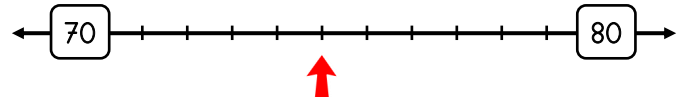
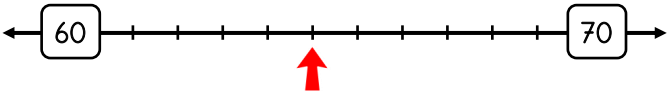
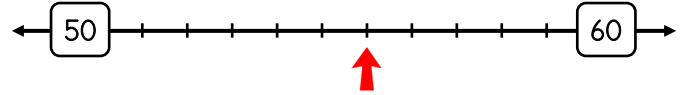
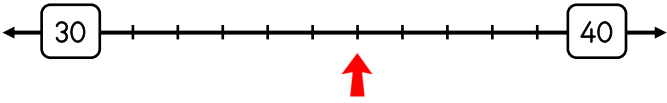
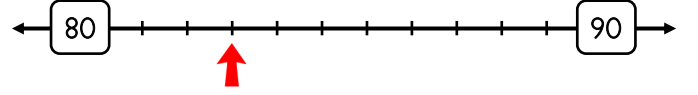
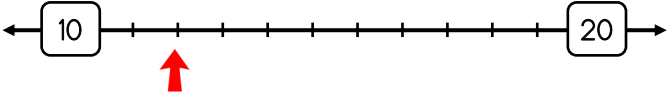


2.Sınıf



## 1 Etkinlik

Ok işareti ile gösterilen sayıyı bulup en yakın onluğunun olduğu kutucuğu boyayalım. (Eşit uzaklıkta ise ikisini de boya)

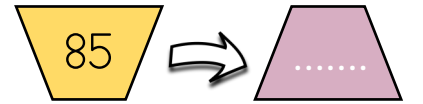


## 2.Sınıf



## 2 Etkinlik

Aşağıda verilen sayıları en yakın onluğuna yuvarlayalım.



## 3 Etkinlik

Soruları cevaplayalım.

➔ 50' ye yuvarlanan en büyük ve en küçük sayı kaçtır?

➔ \*8 sayısının en yakın onluğu 30 olduğuna göre \* yerine gelecek sayılar kaçtır?

