



## 1 Etkinlik

Verilen işlemleri yapalım.

Onlar basamağı	Birler basamağı
4 onluk	5 birlik
3 onluk	2 birlik
.....onluk	.....birlik

Onlar basamağı	Birler basamağı
7 onluk	3 birlik
2 onluk	4 birlik
.....onluk	.....birlik

Onlar basamağı	Birler basamağı
5 onluk	4 birlik
2 onluk	3 birlik
.....onluk	.....birlik

Onlar basamağı	Birler basamağı
2 onluk	8 birlik
0 onluk	1 birlik
.....onluk	.....birlik

Onlar basamağı	Birler basamağı
3 onluk	7 birlik
5 onluk	2 birlik
.....onluk	.....birlik

Onlar basamağı	Birler basamağı
6 onluk	4 birlik
3 onluk	4 birlik
.....onluk	.....birlik

## 2 Etkinlik

Verilen işlemleri yapalım.

7	2
2	5
+	
_____	

3	4
4	5
+	
_____	

8	2
1	4
+	
_____	

5	6
2	3
+	
_____	

3	2
2	4
1	1
+	
_____	

4	3
2	4
3	2
+	
_____	

2	2
1	0
4	7
+	
_____	

5	4
2	3
1	2
+	
_____	





## 3 Etkinlik

Sonuçları aynı olan işlemleri birbiriyle eşleştirelim.

$23+32 =$

$37+22=$

$36+23 =$

$75+21=$

$25+22$

$59+20=$

$47+20$

$41+26$

$63+33$

$45+20=$

$42+37$

$34+12$

## 4 Etkinlik

Aşağıda verilen işlemleri yapalım.

$$\begin{array}{r} 21 \\ + 8 \\ \hline \end{array}$$

$$\begin{array}{r} 45 \\ + 34 \\ \hline \end{array}$$

$$\begin{array}{r} 72 \\ + 26 \\ \hline \end{array}$$

$$\begin{array}{r} 66 \\ + 23 \\ \hline \end{array}$$

$$\begin{array}{r} 17 \\ + 2 \\ \hline \end{array}$$

$$\begin{array}{r} 42 \\ + 33 \\ \hline \end{array}$$

$$\begin{array}{r} 68 \\ + 22 \\ \hline \end{array}$$

$$\begin{array}{r} 35 \\ + 21 \\ + 3 \\ \hline \end{array}$$

$$\begin{array}{r} 21 \\ + 23 \\ \hline \end{array}$$

$$\begin{array}{r} 44 \\ + 22 \\ + 13 \\ \hline \end{array}$$

$$\begin{array}{r} 27 \\ + 42 \\ \hline \end{array}$$

$$\begin{array}{r} 34 \\ + 12 \\ + 3 \\ \hline \end{array}$$





2.Sınıf

## 5 Etkinlik

Aşağıda verilen toplama tablolarını dolduralım.

+	13	15
22		
34		

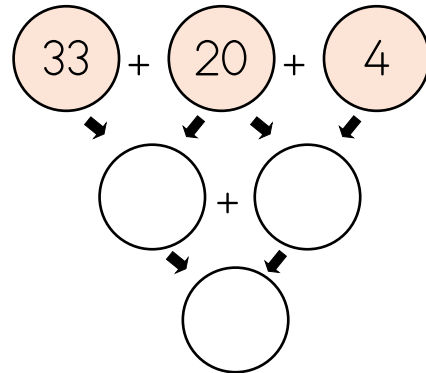
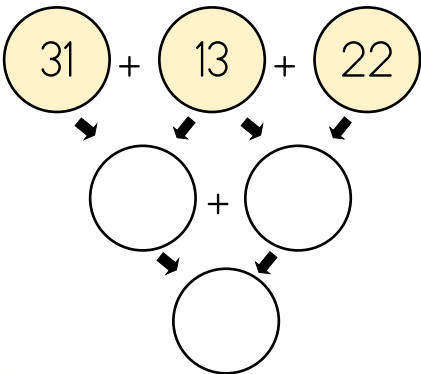
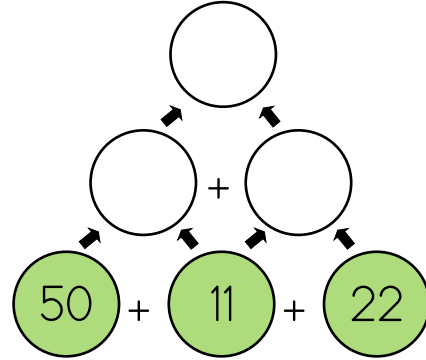
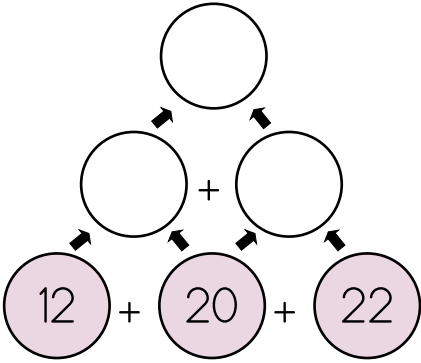
+	21	34
63		
42		

+	35	63
12		
32		

+	60	23
26		
36		

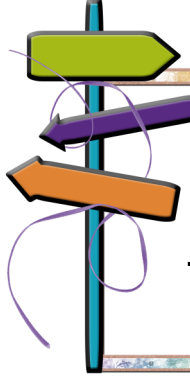
## 6 Etkinlik

Aşağıda verilen toplama tablolarını dolduralım.




## 7 Etkinlik


Verilen toplama işlemlerini yapalım.



$$\begin{array}{r} 23 \\ + 54 \\ \hline \dots\dots\dots \end{array}$$



$$\begin{array}{r} 45 \\ 20 \\ + 4 \\ \hline \dots\dots\dots \end{array}$$

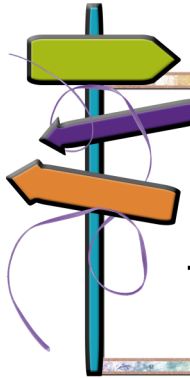


$$\begin{array}{r} 34 \\ + 45 \\ \hline \dots\dots\dots \end{array}$$


$$14 + 22 =$$

$$30 + 18 =$$


$$36 + 42 =$$



$$\begin{array}{r} 58 \\ + 11 \\ \hline \dots\dots\dots \end{array}$$



$$\begin{array}{r} 45 \\ 20 \\ + 13 \\ \hline \dots\dots\dots \end{array}$$

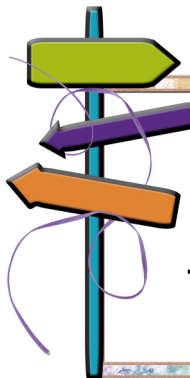


$$\begin{array}{r} 27 \\ + 12 \\ \hline \dots\dots\dots \end{array}$$


$$80 + 15 =$$

$$75 + 23 =$$


$$61 + 12 =$$



$$\begin{array}{r} 49 \\ + 30 \\ \hline \dots\dots\dots \end{array}$$



$$\begin{array}{r} 22 \\ 21 \\ + 33 \\ \hline \dots\dots\dots \end{array}$$



$$\begin{array}{r} 55 \\ + 24 \\ \hline \dots\dots\dots \end{array}$$

