



1. SINIF

ETKİNLİK 1

Sayıları kareli kağıtta tamamlayalım.

0

0	0
0	
0	
0	

1

1	1
1	
1	
1	

2

2	2
2	
2	
2	

3

3	3
3	
3	
3	






1. SINIF




4	4								
4									
4									
4									



5	5								
5									
5									
5									



6	6								
6									
6									
6									




7	7								
7									
7									
7									







1. SINIF




8	8								
8									
8									
8									



9	9								
9									
9									
9									



10	10								
10									
10									
10									




11	11								
11									
11									
11									





1. SINIF




12 12

12

12

12




13 13

13

13

13




14 14

14

14

14



15 15

15


15

15





1. SINIF

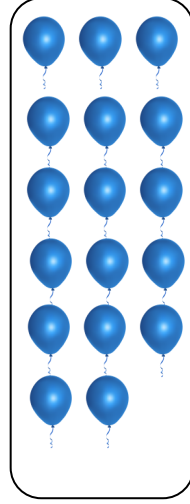


16 16

16

16

16




17 17

17

17

17




18 18

18

18

18



19 19

19


19

19





1. SINIF



20	20								
20									
20									
20									

ETKİNLİK 2

0 ile 20 arasındaki doğal sayıları yazalım.

0	1	2	3	4
....
....
....
....				

0	1	2	3	4
....
....
....				



0	1	2	3	4
....
....
....
....				

