

Saat: 09.00

Tam saat, dakikanın sıfır olduğu saatlerdir. Yani saat başıdır. 60 dakikalık zamanın en başıdır.

☺ Kısa kola → Akrep denir. (Saati gösterir)

☺ Uzun kola → Yelkovan denir. (Dakikayı gösterir)

Tam saat olduğunda:

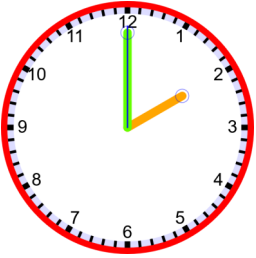
* Yelkovan her zaman 12'nin üstündedir.

* Akrep hangi sayıyı gösteriyorsa saat odur.

09.00

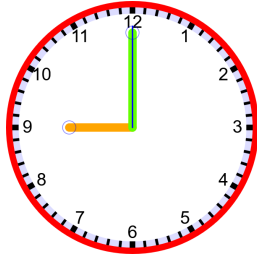
ETKİNLİK 1

Verilen saatler kaçı gösteri örnekteki gibi yapalım.



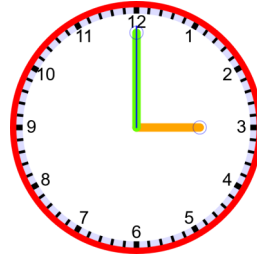
02.00

..Saat iki..



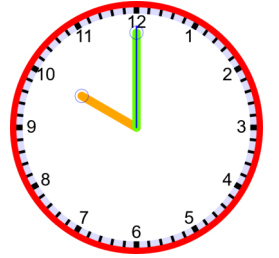
.....

.....



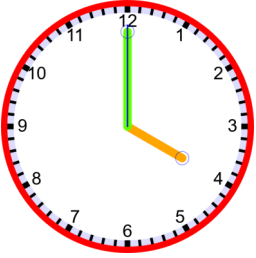
.....

.....



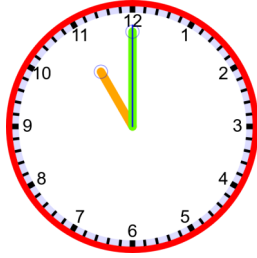
.....

.....



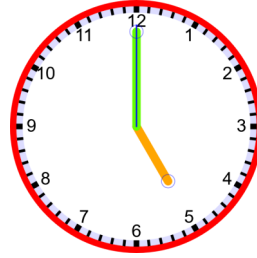
.....

.....



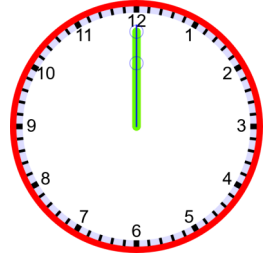
.....

.....



.....

.....



.....

.....

ETKİNLİK 2

Dijital saatlerde verilen saatleri analog saat üzerinde gösterelim.

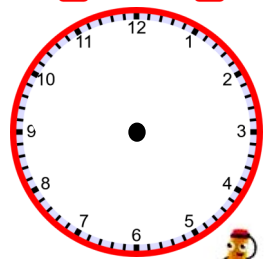
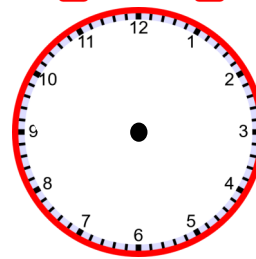
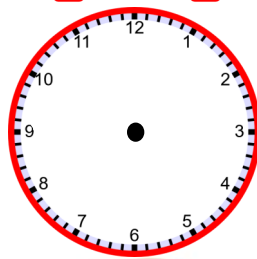
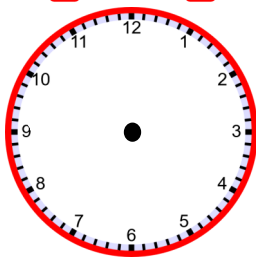
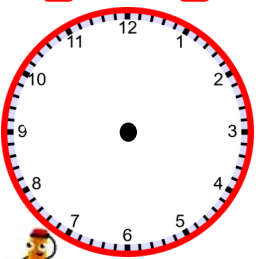
07.00

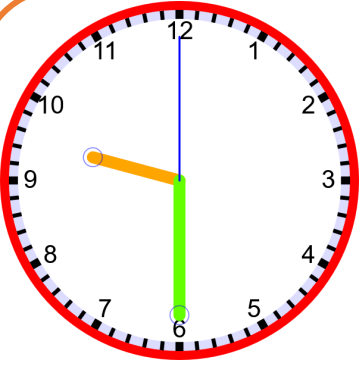
06.00

01.00

08.00

06.00





Saat: 09.30

Buçuk saat, dakikanın 30 olduğu saatlerdir.

☺ Yani saatin yarısı geçmiştir.

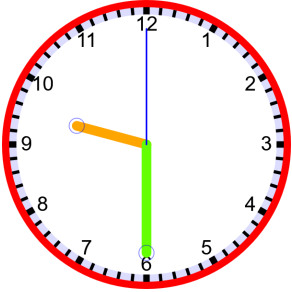
Buçuk saat olduğunda:

- * Yelkovan her zaman 6'nın üstündedir.
- * Akrep iki sayının ortasında olur.
- * Saati söyleyip 30 yerine buçuk deriz.

09.30

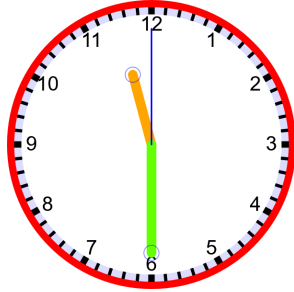
ETKİNLİK 3

Verilen saatler kaç gösteri örnekteki gibi yapalım.



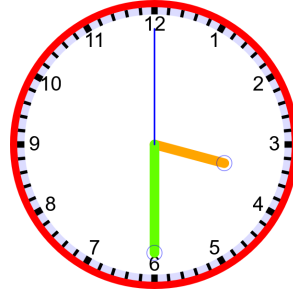
09.30

Dokuz buçuk



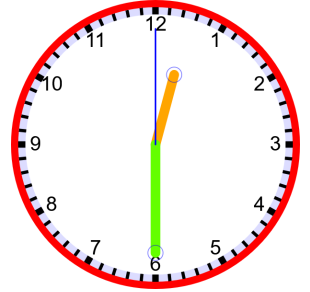
.....

.....



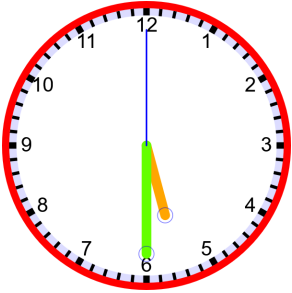
.....

.....



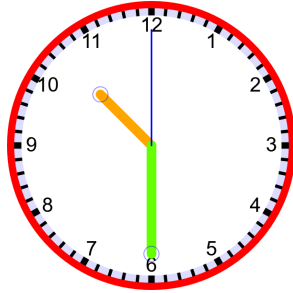
.....

.....



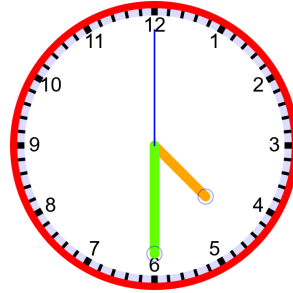
.....

.....



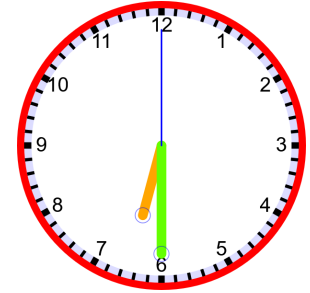
.....

.....



.....

.....



.....

.....

ETKİNLİK 4

Dijital saatlerde verilen saatleri analog saat üzerinde gösterelim.

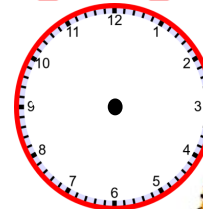
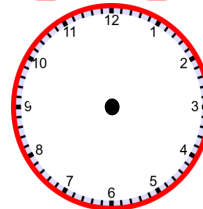
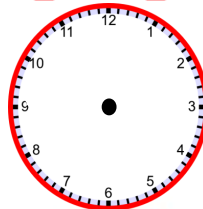
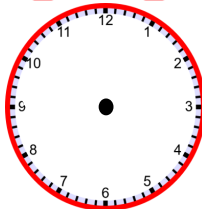
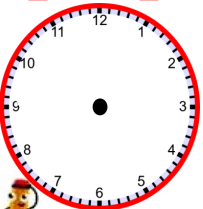
02.30

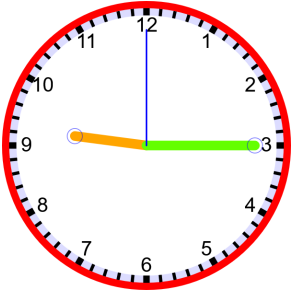
07.30

05.30

01.30

08.30





Saat: 09.15

9'u çeyrek geçiyor.

Çeyrek geçiyor, dakikanın 15 olduğu saatlerdir.

☺ Yani saatin çeyreği geçmiştir.

Çeyrek geçiyor saat olduğunda:

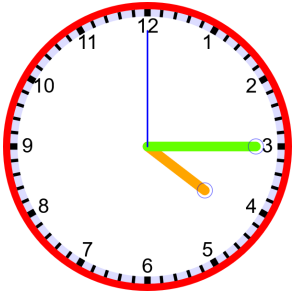
* Yelkovan her zaman 3'ün üstündedir.

* Saati söyleyip 15 yerine çeyrek geçiyor deriz.

09.15

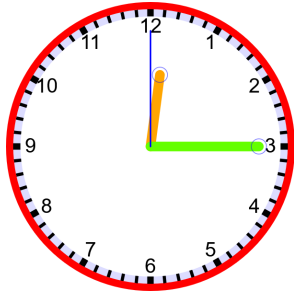
ETKİNLİK 5

Verilen saatler kaçı gösteri örnekteki gibi yapalım.



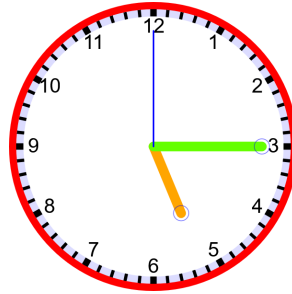
04.15

4'ü çeyrek geçiyor



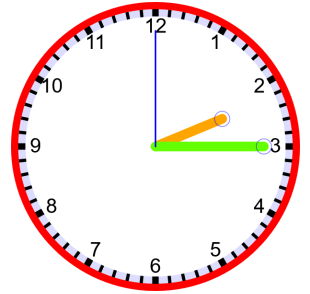
.....

.....



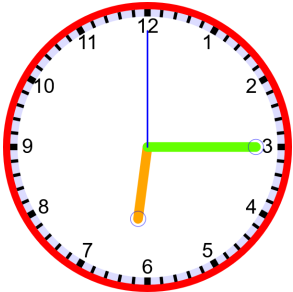
.....

.....



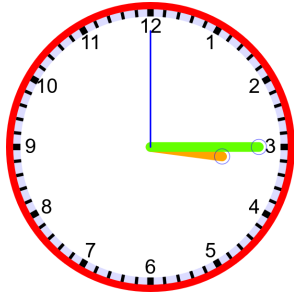
.....

.....



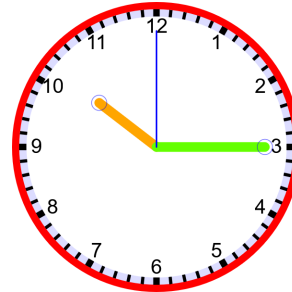
.....

.....



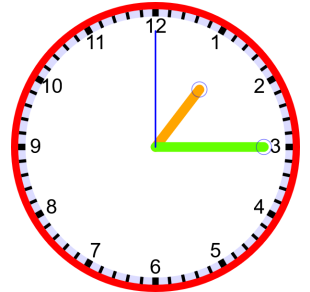
.....

.....



.....

.....



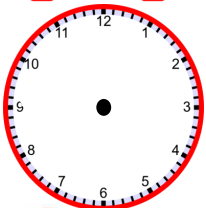
.....

.....

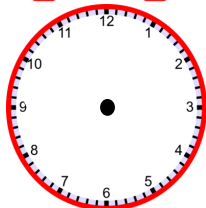
ETKİNLİK 6

Dijital saatlerde verilen saatleri analog saat üzerinde gösterelim.

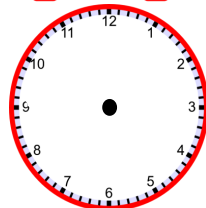
09.15



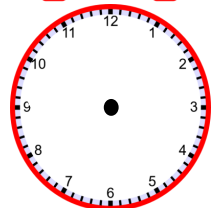
11.15

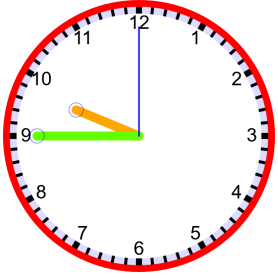


08.15



07.15





Saat: 09.45

10' a çeyrek var

Çeyrek var, dakikanın 45 olduğu saatlerdir.

☺ Yeni saate 15 dakika vardır. Yani çeyrek saat (15 dakika) vardır

Çeyrek var, olduğunda:

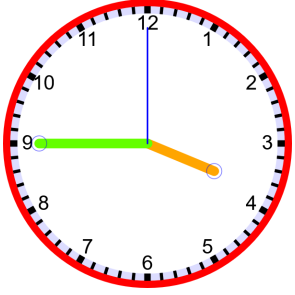
* Yelkovan her zaman 9'un üstündedir.

* Bir sonraki saati söyleyip o saate çeyrek var deriz.

09.45

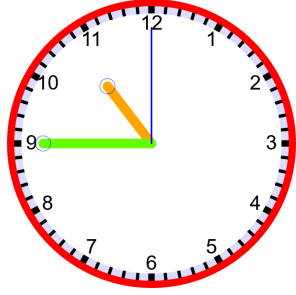
ETKİNLİK 5

Verilen saatler kaçı gösteri örnekteki gibi yapalım.



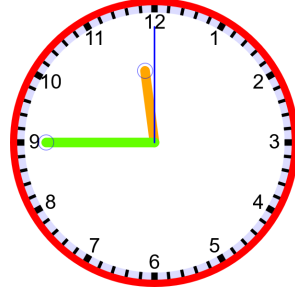
03.45

4'e çeyrek var



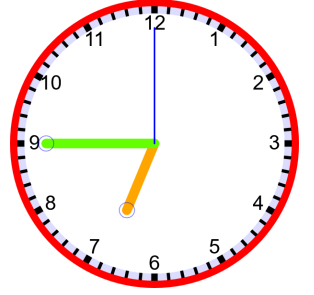
.....

.....



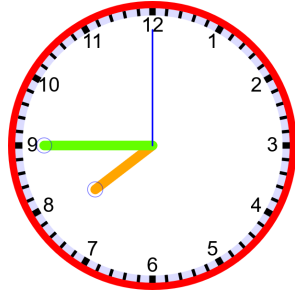
.....

.....



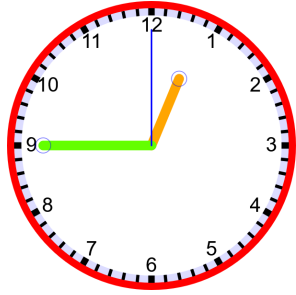
.....

.....



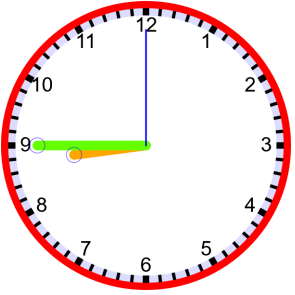
.....

.....



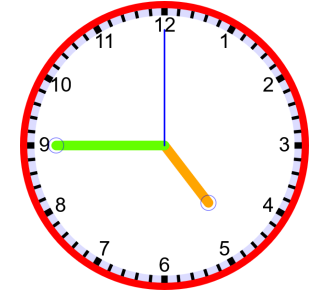
.....

.....



.....

.....



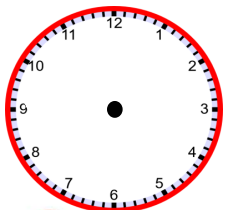
.....

.....

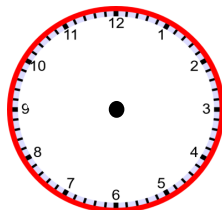
ETKİNLİK 6

Verilen saatleri analog saat üzerinde gösterelim.

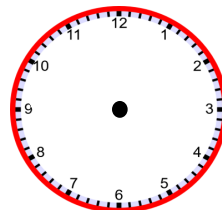
Sekize
çeyrek var



Üç
çeyrek var



Ona
çeyrek var



Bire
çeyrek var

